

**MOTHER KEVIN MEMORIAL PRIMARY SCHOOL NSAMBYA  
REVISION TEST SET VI  
ENGLISH**

**SECTION A**

**Sub-section I**

**In each of the questions 1 to 5, fill the blank space with the correct word.**

1. You should not drink \_\_\_\_\_ a dirty cup.
2. At what \_\_\_\_\_ will the show begin?
3. Our neighbour has \_\_\_\_\_ birth to triplets.
4. Amina is more beautiful \_\_\_\_\_ her friend.
5. Jack was not strong \_\_\_\_\_ to carry the desk.

**In each of the questions 6 to 15, use the correct form of the word given in the brackets to complete the sentence.**

6. Kaddu is the \_\_\_\_\_ of the triplets. (clever)
7. Suubi can play all the different types of \_\_\_\_\_. (piano)
8. His handwriting is getting \_\_\_\_\_ than it was last week. (bad)
9. The soldiers are occupying a \_\_\_\_\_ position. (strategy)
10. The more money he got, the \_\_\_\_\_ he became. (happy)
11. She changed her looks when she \_\_\_\_\_ her hair. (dye)
12. Which is the \_\_\_\_\_ month of the year? (nine)
13. I gained a lot of \_\_\_\_\_ from the newspaper. (know)
14. If she \_\_\_\_\_ hard, she would win a present. (work)
15. The little girl cooked the food \_\_\_\_\_. (she)

**In each of the questions 16 and 17, use each of the given words in a sentence to show that you know the difference in their meaning.**

16. lack \_\_\_\_\_  
\_\_\_\_\_
17. luck \_\_\_\_\_  
\_\_\_\_\_

**In questions 18 and 19, arrange the words in alphabetical order.**

18. strive, stripe, strike, strife

---

19. oxbow, ostrich, owl, ooze

---

**In each of the questions 20 to 22, re-write the sentence giving the opposite form of the underlined word.**

20. Tom writes his notes carefully.

---

21. Bees are known to be idle insects.

---

22. The junior players were given prizes.

---

**In each of the questions 23 and 24, give the plural form of the given word.**

23. chimney \_\_\_\_\_

24. candy \_\_\_\_\_

**In each of the questions 25 and 26, write the given abbreviation in full.**

25. Dept. \_\_\_\_\_

26. i.e. \_\_\_\_\_

**In each of the questions 27 to 30, re-write the sentence giving a single word with the same meaning as the underlined group of words.**

27. John went away without permission from home.

---

28. The guests were entertained by the school singers and drum-players.

---

29. Sandra got married to the King's Son.

---

30. An elephant with its two young ones crossed the road and entered a forest.

---

---

**Sub-section II**

**In each of the questions 31 to 50, re-write the sentence as instructed in the brackets.**

31. A Kob is fast. A cheetah is faster. (Join the sentences using: .....**not**.....**as**.....)

---

---

32. We collected our books. We gave them to the teacher. (Re-write as one sentence beginning: **After**.....)

---

---

33. The dog barked as soon as he saw a stranger. (Re-write beginning: **Having**.....)

---

---

34. None of us went to the garden in the morning. (Re-write the sentence beginning: **All**.....)

---

---

35. Kato did not have enough money. He did not buy a new bicycle. (Re-write as one sentence using: .....**if**.....)

---

---

36. Money is very important but it cannot be used to kill a snake. (Re-write the sentence using: .....**though**.....)

---

---

37. He was a strong man. He could wrestle down a bull. (Re-write as one sentence using: .....**such a** .....**that**.....)

---

---

38. This rope is too weak to tie a goat. (Re-write using: .....**so**.....**that**.....)

---

---

---

39. "Where did you sleep last night?" mother asked Tom. (Re-write the sentence beginning: **Mother wanted to know**.....)

---

---

40. A new bicycle is being ridden by Wasswa. (Re-write ending: .....**bicycle**.)

---

---

41. It is not good to do things in a hurry. (Re-write the sentence ending: ....**not good**.)

---

---

42. We shall harvest this maize before the next rains. (Re-write the sentence beginning; **By the**.....)

---

---

43. Does this pen belong to you? (Re-write the sentence beginning: **Are you**.....?)

---

---

44. Dad planted trees when he was young because he wanted to have shade in future. (Re-write the sentence using: .....**in order**.....)

---

---

45. I lent my ink to Jane. (Re-write the sentence beginning: **Jane**.....)

---

---

46. Musa is a very fast driver. (Re-write the sentence beginning: **What**.....)

---

---

47. Watching a play in a theatre is very interesting. (Re-write the sentence ending: ..... **a theatre**.)

---

---

48. The old man fainted. His car was hit by a tree. (Re-write as one sentence using: .....**whose**.....)

---

---

49. Apart from enjoying chicken, Joseph also enjoys fish. (Re-write beginning: **Besides**.....)

---

---

50. Nairobi is far from Kampala. Kigali is also far from Kampala. (Re-write as one sentence using: .....**and so**.....)

---

---

### **SECTION B**

**51.** Read the passage below carefully and answer, in full sentences, the questions that follow.

It is from various materials that we make clothes; some clothes are made out of cotton. However, there are several steps in growing cotton before clothes are produced.

The first step is to clear the garden. This involves cutting down the bushes, uprooting some tree stamps and burning all of them. This is normally done during the dry season. The next step is to plough the garden. This is done when the rainy season begins. Ploughing can be done using either an ox-plough or a tractor. The agricultural officers advise that it is good to plough the garden several times before planting cotton. This reduces the problem of weeds.

When the garden is completely ready, the cotton seeds are planted in rows and left to grow. As the cotton plants grow, the farmer then begins weeding and thinning. Thinning means uprooting some young plants from each bunch so that there are only a few left.

After about four months, the cotton is ready for picking. This is not the end. Cotton has to be sorted. At this step the bad cotton is separated from the good one. Finally,

the cotton is taken to the ginnery for ginning. When the cotton has been ginned, it is then taken to textiles where clothes are produced.

**Questions:**

(a) From which material are clothes mostly made?

---

---

(b) What is the first step in the process of growing cotton?

---

---

(c) Mention one activity done during the dry season.

---

---

(d) What do you think is done during the rainy season?

---

---

(e) How long does the cotton take to grow?

---

---

(f) How is the ploughing done?

---

---

(g) Why is it advisable to plough the garden several times before planting cotton?

---

---

(i) Give another word or group of words to mean the same as;

(i) separated \_\_\_\_\_

(ii) produced \_\_\_\_\_

52. Read the poster below and answer in full sentences, the questions that follow.

**SOCCER! SOCCER!**

THE LITTLE STARS VS KALIRO BOYS

WHERE: MOLO PRIMARY SCHOOL PLAY GROUND

WHEN: 9<sup>TH</sup> OCTOBER, 2014

TIME: 2:00 P.M.

FEE: PUPILS: 2,000/=

OTHERS: 5,000/=

COME ONE! COME ALL!

DON'T MISS

SUB COUNTY CHIEF, MOLO

20<sup>TH</sup> SEPTEMBER, 2014

**Questions:**

- a) Which teams will play soccer?  
\_\_\_\_\_
- b) Where will the match be played?  
\_\_\_\_\_  
\_\_\_\_\_
- c) On which day will the match be played?  
\_\_\_\_\_
- d) How much will you pay to watch the match?  
\_\_\_\_\_  
\_\_\_\_\_
- e) Who wrote the poster?  
\_\_\_\_\_  
\_\_\_\_\_
- f) When was the poster written?

---

---

g) At what time will the match begin?

---

---

h) Write P.M. in full as used on the poster above.

---

---

i) Which team is visiting?

---

---

j) What will Jack of P.5 and his parents pay?

---

---

53. **Yesterday, Sarah's class did an exam. Sarah had taken her brother who was sick to the clinic. She never appeared at school.**

*Complete the conversation between her and the teacher.*

Sarah: \_\_\_\_\_

Teacher: Yes, come in.

Sarah: \_\_\_\_\_

Teacher: Good morning, Sarah.

Sarah: \_\_\_\_\_

Teacher: You would like to do an exam! Why didn't you do it yesterday?

Sarah: \_\_\_\_\_

Teacher: What made you absent?

Sarah: \_\_\_\_\_

Teacher: What had you gone to do at the clinic?

Sarah: \_\_\_\_\_

Teacher: What was wrong with him?

Sarah: \_\_\_\_\_

Teacher: Fever is very common nowadays. Did he get treatment?

Sarah: \_\_\_\_\_

Teacher: That's fine. You can get ready for the examination now.





55. Read the conversation below and complete it correctly using the words in the box.

<b>queue,</b>	<b>monthly,</b>	<b>steal,</b>	<b>bank,</b>	<b>money,</b>
<b>cashier</b>	<b>advice,</b>	<b>account,</b>	<b>withdraw,</b>	<b>accepted</b>

Okeny who works in Mukwano Industries was paid four hundred thousand shillings as his \_\_\_\_\_ salary. He did not know what to do with the \_\_\_\_\_. He feared that someone might \_\_\_\_\_ it. His friend Kapale, advised him to take the money to the \_\_\_\_\_ for it would be safe there. Okeny \_\_\_\_\_ and his friend escorted him to the bank.

He opened up his \_\_\_\_\_ at the bank. He was told that whenever he would need his money, he would \_\_\_\_\_ it.

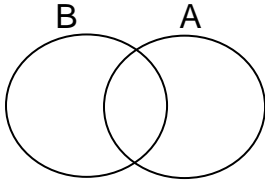
The \_\_\_\_\_ would give him the amount he would request for. He even showed him a \_\_\_\_\_ of customers who were waiting to be served. Okeny thanked his friend Kapale for the good \_\_\_\_\_.

***Good Luck***

**MOTHER KEVIN MEMORIAL PRIMARY SCHOOL NSAMBYA**  
**REVISION TEST SET VI**  
**MATHEMATICS**  
**SECTION A: (40 MARKS)**

1. Work out: 
$$\begin{array}{r} 4 \quad 9 \\ - 1 \quad 1 \\ \hline \\ \hline \end{array}$$

2. Shade  $(A \cap B)'$  in the figure below.



3. Work out:  $+7 + -4$

4. Write 14,946 in words.

5. A mathematical lesson that lasted  $2 \frac{1}{2}$  hours ended at 11:20 a.m. When did it start?

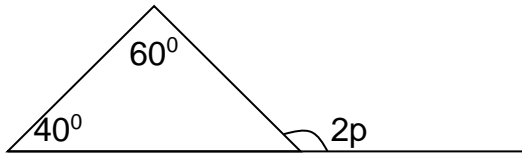
6. Simplify:  $\frac{2}{5} \times \frac{3}{4}$

7. There are 30 eggs on a tray. Find the number of eggs on 52 trays.

8. Find the next two numbers in the sequence.  
7, 12, 17, 22, 27, \_\_\_\_\_, \_\_\_\_\_

9. The radius of a circle is 7cm. Find its area.

10. Find the size of angle marked p in the figure below.

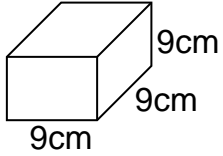


11. A bus covered a distance of 280 km in 4 hours. What was its average speed?

12. A trader sold a box of soap at sh. 17500 making a loss of U sh. 1800. What was the buy price of the soap?

13. In a class of 30 pupils, there are 16 girls. What is the probability of electing a boy as a class monitor?


14. Find volume of the cube below.





15. Given that  $a = 7$ ,  $b = 2$  and  $c = 6$ . Find the value of  $\frac{ac}{b}$

16. Using a pencil, a ruler and a protractor only, draw an angle of  $60^\circ$ .

17. Tell the morning time shown on the clock face below.



18. Simplify:  $3 + 4 = \underline{\hspace{2cm}}$  (mod 6)
19. Kato has twice as many books as Wasswa. If they both have 27 books, how many books does Wasswa have? (2 marks)

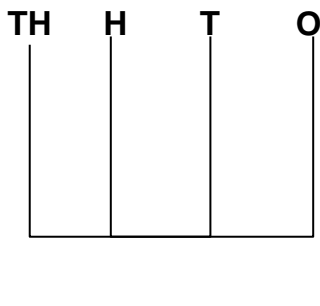
20. If  represent 40 balls, how many balls are represented by  ?

**SECTION B: (60 Marks)**

- 21 (a) The last page of our Mathematics text book bears the numeral CXCVI. Write the numeral on the last page in Hindu-Arabic numeral. (2 marks)

- (b) What is the place value of 6 in the number 563084? (1 mark)

- (c) Show 2 5 4 1 on the abacus below. (1 mark)



22. Kalungi went shopping and bought the items as shown in the table below.

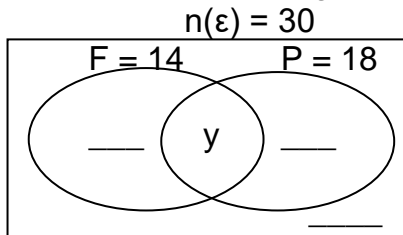
Item	Quantity	Unit price	Amount
Eggs	30	Sh. 250 @	Sh. ....
Meat	.....kg	Sh. 8000	Sh. 24000
Cooking oil	½ litre	Sh. .... per litre	Sh. 3000
Sugar	1 ½ kg	Sh. 3000 per kg	Sh. ....
<b>Total</b>			<b>Sh. ....</b>

(a) Complete the table. (1 mark each)

(b) If he remained with sh. 4750, how much money did he go with? (1 mark)

23. At a primary seven leavers party of 30 candidates, 14 drank Fanta (F), 18 drank pepsi cola (P), 2 did not drink any of two drinks, y drank both drinks.

(a) Use the above given information to complete the venn diagram below. (3 marks)



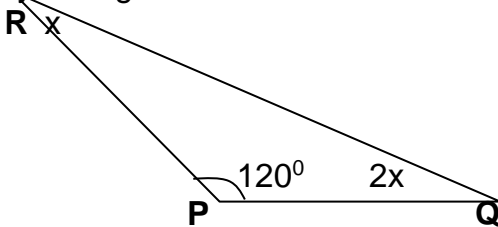
(b) How many candidates drank both types? (2 marks)

(c) How many candidates drank only one type of soda? (1 mark)

24. (a) Work out:  $\frac{4.8 \times 0.6}{1.6}$  (3 marks)

(b) Work out:  $\frac{1}{2} \times \frac{3}{5} \div \frac{3}{4}$  (2 marks)

25 (a) Study the figure below and answer the questions that follow.

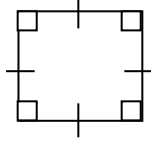


(i) Find the value of  $x$ . (2 marks)

(ii) Find the size of angle Q. (1 mark)



- (b) How many lines of symmetry has the figure below? (2 marks)



26. The table below shows litres of milk Okello collected from his farm in a week.

Days of the week	Mon.	Tue.	Wed.	Thur.	Fri.	Sat.	Sun.
Litres of milk	12	16	12	16	13	12	10

- Find (a) mode (1 mark)

- (b) median (2 marks)

- (c) mean (2 marks)

27. (a) Solve:  $\frac{w}{6} = 15$  (2 marks)

- (b) Amos is 7 years older than his wife. If their total age is 55 years, how old is the wife? (2 marks)

28. (a) Write a quarter to twelve o'clock in the morning using (a.m. or p.m.)  
(1 mark)

(b) Change 90km/hr to m/sec (2 marks)

(c) Work out: 

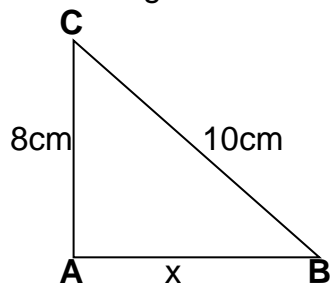
Wk	Days
9	2
- 3	5

 (2 marks)

29 (a) The number of books in the library is 24000. What is the new number if books are decreased by 20%? (2 marks)

(b) Amos, Baker and Maria shared shs. 108000 in the ratio of 3:2:5 respectively. How much money did each get? (4 marks)

30. The figure below is a right angled triangle.



(a) Find the value of x. (2 marks)

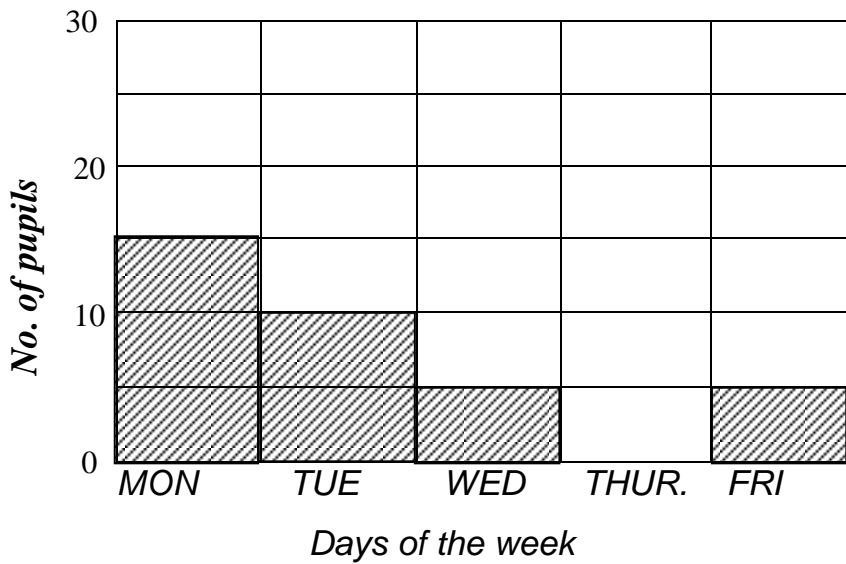
(b) Work out the area of triangle **ABC** (2 marks)

(c) Calculate the perimeter of the triangle **ABC**. (1 mark)

31 (a) Using a pencil, a ruler and a pair of compasses only, construct a triangle XYZ in which  $XY = 5\text{cm}$ , angle  $X = 60^\circ$  and angle  $Y = 90^\circ$ . (4 marks)

(b) Measure line YZ. (1 mark)

32. The graph below shows the number of absentees in a P.6 class of Nateete Primary school. There are 55 pupils in the class. Use it to answer questions that follow.



(a) Which day had the highest attendance? (1 mark)

(b) What was the total number of absentees for the whole week? (1 mark)

(c) How many pupils attended on Thursday? (1 mark)

(d) Calculate the average number of absentees for the whole week. (1 mark)

*Good Luck*

**MOTHER KEVIN MEMORIAL PRIMARY SCHOOL NSAMBYA**  
**REVISION TEST SET VI**  
**SCIENCE**  
**SECTION A**

1. Name the human organ for tasting.  
\_\_\_\_\_
2. Mention one effect of deforestation to the community.  
\_\_\_\_\_  
\_\_\_\_\_
3. A plant is one of the resources in the environment. Why do we say it is renewable?  
\_\_\_\_\_  
\_\_\_\_\_
4. How does the virus that cause AIDS affect the immune system of the body?  
\_\_\_\_\_  
\_\_\_\_\_
5. Which component of air is a byproduct of photosynthesis?  
\_\_\_\_\_
6. Give one reason why shadows are shortest at mid-day.  
\_\_\_\_\_  
\_\_\_\_\_
7. State one function of the kidney.  
\_\_\_\_\_
8. Where does urine go after leaving the ureter?  
\_\_\_\_\_  
\_\_\_\_\_
9. How is a duck billed platypus different from other animals?  
\_\_\_\_\_  
\_\_\_\_\_
10. Mention one primary sex characteristic common in both adolescent boys and girls.  
\_\_\_\_\_  
\_\_\_\_\_
11. Name the most destructive stage in the life cycle of a butterfly.  
\_\_\_\_\_
12. Give one reason that people give for smoking.  
\_\_\_\_\_  
\_\_\_\_\_

13. How does bush burning lead to soil erosion?

---

---

14. Name the part where the digestion ends.

---

15. Why is polio vaccine called an oral vaccine?

---

---

16. Identify the cattle product used in leather turning.

---

17. Why is it not advisable to pour paraffin in a pit latrine?

---

---

18. In which body organ does filtration of blood take place?

---

19. Why is a trachea made of rings of cartilage?

---

---

20. Mention any one cause of soil leaching.

---

---

21. Suggest the main reason why people keep merino sheep.

---

---

22. What form of energy contributes to the formation of water vapour?

---

---

23. State the value of red blood cells in the body.

---

---

24. Which property of air is illustrated in the diagram below?

---

---

25. Give one situation which shows that light travels faster than sound.

---

---

26. Of what importance are dustbins in a school?

---

---

27. How does a passion fruit plant benefit from growing near a guava tree?

---

---

28. How do hookworms affect the body?

---

---

29. Give the main cause of fainting.

---

---

30. State any one reason why people who rear sheep practice docking.

---

---

31. Why are clay soils not good for crop growing?

---

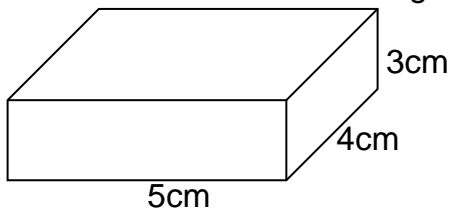
---

32. What class of food helps in proper food digestion to minimize constipation?

---

---

33. If the mass of the rectangular block below is 120g, work out its density.



34. State the main reason farmers number their cattle.

---



---

35. Of what importance is cotton in a poultry house?

---

---

36. Mention one disorder of the liver.

---

---

37. Why is water regarded as matter?

---

---

38. How does a bee produce sound?

---

---

39. What are renewable resources?

---

---

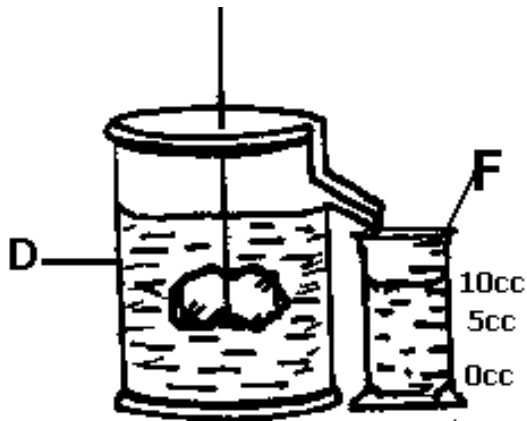
40. Name the chemical in tobacco which causes addiction.

---

---

**SECTION B**

41. **Below are apparatus used to carry out an experiment.**



(a) Name the apparatus labelled **D** and **F**.

(i) **D** \_\_\_\_\_

(ii) **F** \_\_\_\_\_

(b) Find the volume of the irregular object.

(c) What name is given to the above method?

---

42 (a) What is Primary Health Care?

---

---

(b) State the element of PHC promoted by each of the following activities.

(i) spacing children

---

(ii) Washing and ironing clothes

(c) What is the importance of the child Health Card to a health worker?

---

---

43 (a) Give one similarity between a spider and a housefly.

---

---

(b) How is a spider different from a housefly in the following;

(i) breathing \_\_\_\_\_

---

(ii) pairs of legs \_\_\_\_\_

---

(c) Apart from a spider, name any other example of an arachnid.

---

44 (a) What is the importance of treads on a bicycle tyre?

---

---

(b) Give one advantage and disadvantage of friction.

- (i) Advantage \_\_\_\_\_  
\_\_\_\_\_
- (ii) Disadvantage \_\_\_\_\_  
\_\_\_\_\_
- (c) How can friction be reduced in moving parts of machines?  
\_\_\_\_\_  
\_\_\_\_\_

45 (a) State two factors which should be taken into account when selecting a site for building a house.

- (i) \_\_\_\_\_  
\_\_\_\_\_
- (ii) \_\_\_\_\_  
\_\_\_\_\_

- (b) Write down one material used to construct a permanent house.  
\_\_\_\_\_
- (c) How does a well built house contribute to the good health of a family?  
\_\_\_\_\_  
\_\_\_\_\_

46 (a) What is Immunity?  
\_\_\_\_\_  
\_\_\_\_\_

Below is part of a child health card for Ahmed's boy who was in Mulago hospital. Study it and answer questions that follow.

Date	Immunizations				
	BCG	POLIO	DPT HCP.B	MEASLES	NXT VISIT
					22/03/09
10/2/2009	√	√			22/03/09
22/3/2009		√	√		28/04/09
25/4/2009		√	√		28/05/09
28/5/2009		√	√		20/11/09

(b) On which date could this boy have been born?

---

(c) Give a reason for your answer.

---

(d) Why is the measles vaccine given last to babies?

---

---

47 (a) What is environmental conservation?

---

(b) Give two reasons why environment conservation is necessary in Uganda.

(i)

---

---

(ii)

---


---

(c) What should Ugandans do to conserve resources in the environment?

---

---

48. **The diagram below shows a fish.**



(a) Name the habitat for a fish.

---

(b) How is part **y** useful to a fish?

---

(c) Give **one** uses of a fish to people.

---

(d) By use of an arrow, show the part which protects the gills.

49. (a) Identify any **two** types of poultry.

(i) \_\_\_\_\_

(ii) \_\_\_\_\_

(b) Give **one** disease that attacks poultry birds.

---

(c) How do poultry help to reduce food deficiency diseases?

---

50 (a) Which instrument do farmers use to detect the presence of water in milk on a dairy farm?

---

(b) Name the method of grazing where animals are tied on a peg using a rope.

---

(c) Mention one viral disease which affects cattle.

---

(d) What is the importance of dipping animals?

---

51 (a) How are scavenger birds useful in the environment?

---

(b) Name one bird that is an agent of pollination.

---

(c) Suggest the danger of some birds to a crop farmer.

---

---

(d) Why are birds called warm blooded animals?

---

---

52 (a) What is a biological change?

---

---

(b) Give any two characteristics of a physical change.

(i) \_\_\_\_\_

(ii) \_\_\_\_\_

(c) Give one example of a biological change.

---

---

53.a) Why is First Aid usually administered after an accident?

i) \_\_\_\_\_

ii) \_\_\_\_\_

(b) What does "A" stand for in the ABC of carrying out First Aid?

---

---

(c) Why is it dangerous to cause a victim who has swallowed paraffin to vomit?

---

---

54. Match the following body processes to their roles correctly.

Respiration	Removal of waste products from the body.
Digestion	Taking in and out of air.
Excretion	Oxidation of food to produce energy.
Breathing	Breaking down of food into soluble substances.

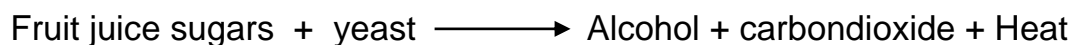
(i) Respiration \_\_\_\_\_

(ii) Digestion \_\_\_\_\_

(iii) Excretion \_\_\_\_\_

(iv) Breathing \_\_\_\_\_

55. Below is a method of brewing alcohol in equation form. Use it to answer questions.



(a) Name the method of alcohol brewing represented above.

---

(b) Why is yeast added to sugars in juices during fermentation?

---

---

(c) Give one reason why people take Alcohol.

---

---

(d) In which one way does the taking of too much alcohol lead to under development in a community?

---

---

**Good Luck**

**MOTHER KEVIN MEMORIAL PRIMARY SCHOOL NSAMBYA**  
**REVISION TEST SET VI**  
**SOCIAL STUDIES**  
**SECTION A**

*(Questions in this section carry 1 mark each)*

1. Name the capital city of Tanzania.

---

2. State the use of a key on a map.

---

---

3. Where is snow found in East Africa?

---

---

4. What is natural vegetation?

---

---

5. Mention any one tourist attraction found at the coast in Kenya.

---

---

6. Why are prefects important in a school?

---

---

7. Give any one reason why people drain swamps.

---

---

8. Name one tribe that was involved in long distance trade in Kenya.

---

---

9. Why is soil erosion common in Kabale district?

---

---

10. What is a common market?

---



---

11. Mention the forces that led to the formation of the Rift valley.

---

---

12. State any one use of wind to farmers.

---

---

13. Which river joins Lake Albert to lake Edward?

---

14. Give one reason why a high population in Uganda can be bad.

---

---

15. Name the group of foreigners connected to the beginning of Swahili in East Africa.

---

16. In which way is limestone important to the building industry?

---

---

17. What is humidity?

---

---

18. How was the discovery of iron important to early man?

---

---

19. What was the work of Sir Gerald Portal in Uganda?

---

---

20. Which body in Uganda is responsible for making laws?

---


---

21. What was the major cause of the Maji-Maji rebellion?

---

---

22. Draw a map symbol of a hill.



23. State one reason why many people in East Africa use radios to communicate.

---

---

24. Name the system of trade that does not involve use of money.

---

25. Give any one example of a social activity in a community.

---

26. Why is the Uganda flag respected?

---

---

27. Name the people who introduced coffee growing in Uganda before foreigners came.

---

28. Why is it difficult to carry out plantation agriculture in North Eastern Uganda?

---

---

29. Where in a weather station is a barometer kept?

---

---

30. State any one duty of Bank of Uganda.

---

---

31. Name the smallest member country of the East African Community.

---

---

32. In which kingdom in Uganda were the Abarusura used to fight for their King?

---

---

33. Why is it good for a school to make a budget?

---

---

34. What is an oil refinery?

---

---

35. How are the monsoon winds important in East Africa?

---

---

36. Who was the president of Uganda at the time the first East African Community was formed?

---

---

*For each of the questions 37 to 40, answer EITHER a Christian OR an Islamic question but not both. No marks will be awarded to a pupil who attempts both alternatives in a number.*

37. Either: Why do Christians respect the Bible?

---

---

Or: Why do Muslims respect the Qur'an?

---

---

38. Either: Who was the first Christian martyr according to the Bible?

---

---

Or: Who was the son of Adam that was killed due to his faith in Allah?

---

---

39. Either: Where was Jesus buried?

---

---

---

Or: Where was Prophet Muhammad (SAW) buried?

---

---

40. Either: How did Judas Iscariot meet his death?

---

---

Or: How did Prophet Issa meet his death?

---

---

**SECTION B**

*(Questions in this section carry 4 marks each)*

41. (a) Name any two symbols of the East African Community.

(i) \_\_\_\_\_

(ii) \_\_\_\_\_

(b) Give any two reasons why the East African Community was formed.

(i) \_\_\_\_\_

\_\_\_\_\_

(ii) \_\_\_\_\_

\_\_\_\_\_

42. (a) What is the use of the Six's thermometer in a weather station?

\_\_\_\_\_

\_\_\_\_\_

(b) State the importance of keeping weather records.

\_\_\_\_\_

\_\_\_\_\_

(c) Give any two reasons why some places in East Africa receive a lot of rainfall.

(i) \_\_\_\_\_

(ii)

---

---

---

43. (a) Who were the first foreigners to come to East Africa?

---

---

(b) Mention any two reasons why the people you named above came to East Africa.

(i)

---

---

(ii)

---

---

(c) Give any one reason why foreigners took long to come to the interior of East Africa.

---

---

44. (a) Give the name of a tree that provides soft wood.

---

(b) State two different ways carpenters use timber.

(i)

---

---

(ii)

---

---

(c) Mention one reason why people should plant more trees.

---

---

45. Study the climatic chart below and answer the questions that follow.

Month of the year	J	F	M	A	M	J	J	A	S	O	N	D
Temperature in °C	20	22	24	27	30	32	33	31	28	25	21	18
Rainfall in mm	420	300	230	250	200	100	50	150	250	200	300	450

(a) How many rainy seasons are shown on the chart?

---

(b) Which is the wettest month?

---

(c) Identify one economic activity that can be carried out in the above area.

---

(d) Why do you think July is the hottest month?

---

46. (a) What is a National Constitution?

---

---

(b) Mention any three responsibilities of a citizen to his/her country.

(i) 

---

---

(ii) 

---

---

(iii) 

---

---

47. (a) What is the work of a veterinary doctor?

---

---

(b) Mention any one economic activity where the services of a veterinary doctor are needed.

---

---

(c) State two reasons why services of veterinary doctors don't reach some places in the villages.

(i) 

---

---

(ii) 

---

---

48. (a) Name the missionary connected to the building of Mengo hospital.

---

---

(b) Apart from medical care, mention one social service which the missionaries provided in Uganda.

---

---

(c) Where in East Africa was the first mission station built?

---

---

(d) Why was Bishop James Hannington killed in Busoga on his way to Buganda?

---

---

49. a) Mention any one special group of people who are represented in Uganda's Parliament.

---

(b) How are the following people important in Parliament?

i) Speaker:

---

ii) Sergeant-at-arms:

---

---

(c) Mention one cause of a bye-election.

---

50. (a) What is population census?

---

---

(b) Give any two kinds of information collected during census.

(i) \_\_\_\_\_

(ii) \_\_\_\_\_

(c) Why does government want to know the number of people living in Uganda?

---

---

For each of the questions 51 to 55, answer EITHER Christian OR Islamic questions but not both. No marks will be awarded to a pupil who attempts both alternatives in a number.

51. **Either:**

(a) Name the angel who revealed the good news of Jesus' birth to the shepherds.

---

---

(b) What were the shepherds doing when the angel appeared to them?

---

---

(c) How were the shepherds able to locate where baby Jesus was?

---

---

(d) Why was the birth of Jesus called "Good News"?

---

---

**Or:**

(a) Name the angel who revealed the Qur'an to Prophet Muhammad.

---

---

(b) On which mountain was Prophet Muhammad when he received the Qur'an?

---

---

(c) Give the meaning of these parts of a Qur'an:

(i) Surah \_\_\_\_\_

---

---

(ii) Jjuzu \_\_\_\_\_

---

---

52. **Either:**

(a) What is Prayer?

---

---

(b) Mention the prayer that Jesus taught to His disciples.

---

---



---

(c) Give two reasons why Christians pray.

(i) \_\_\_\_\_

(ii) \_\_\_\_\_

**Or:**

(a) Outline any four things which spoil prayer (salaat)

(i) \_\_\_\_\_

(ii) \_\_\_\_\_

(iii) \_\_\_\_\_

(iv) \_\_\_\_\_

53. **Either:**

(a) What title is given to the head of the Church Of Uganda?

(b) Give any one duty of a Reverend.

(c) Apart from religious leaders, mention any other two types of leaders in our community.

(i) \_\_\_\_\_

(ii) \_\_\_\_\_

**Or:**

(a) What title is given to the head of Muslims in Uganda?

(b) Mention the major role of an Imam.

---

(c) State any two qualities of a good Muslim leader.

(i) \_\_\_\_\_

(ii) \_\_\_\_\_

54. **Either:**

(a) Name the prophet who built the ark.

(b) Name the three sons of the prophet in (a) above who are regarded as the ancestors of all people on earth.

(i) \_\_\_\_\_

(ii) \_\_\_\_\_

(iii) \_\_\_\_\_

**Or:**

(a) What is saum?

(b) How many days do Muslims fast in the month of Ramathan?

(c) Give any two things a Muslim is expected to do during saum.

(i) \_\_\_\_\_

(ii) \_\_\_\_\_

55. **Either:**

(a) Why did God send Moses to Egypt?

(b) Write any two problems that the Israelites faced on their way to the Promised Land.

(i) \_\_\_\_\_

(ii) \_\_\_\_\_

- (c) State any one-way God helped the Israelites overcome any of the mentioned problems in (b) above.

---

---

**Or:**

- (a) Why did Allah send Musa to Egypt?

---

---

- (b) What was Musa doing when Allah called him?

---

---

- (c) Why did Allah punish the pharaoh and his army?

---

---

- (d) How did Allah punish the Pharaoh and his army?

---

---

***Good Luck***

